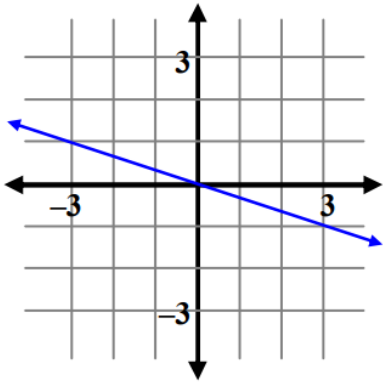


ALL PROBLEMS CAN BE COMPLETED ON THIS WORKSHEET

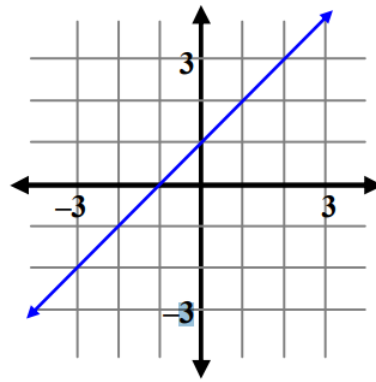
**WS 7A.1 - Slope**

#1-4, Find the slope of each line.

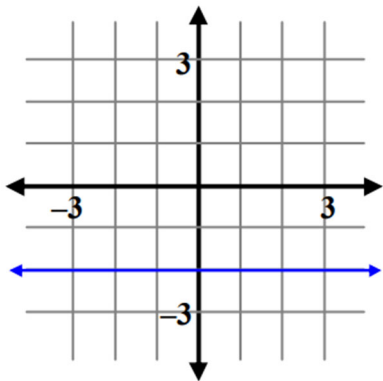
1.



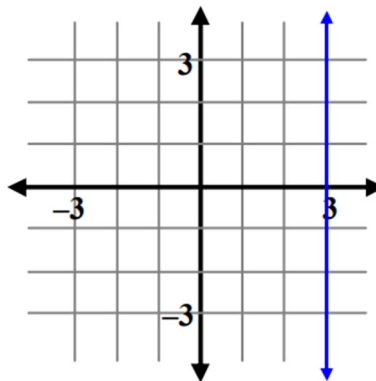
2.



3.



4.



#5-10, Find the slope of the line that contains each pair of points.

5.  $(3, 9)$  and  $(1, 5)$ 6.  $(-1, 3)$  and  $(3, -2)$ 7.  $(-3, 0)$  and  $(4, -2)$ 8.  $(-2, 7)$  and  $(-2, -1)$ 9.  $(6, 4)$  and  $(-7, 4)$ 10.  $(-8, 2)$  and  $(-3, 6)$