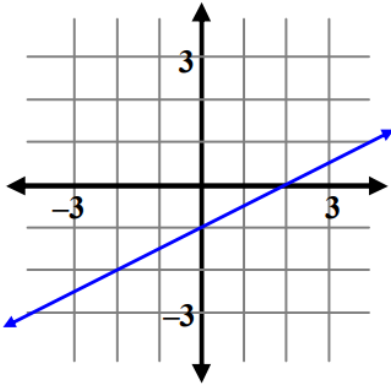


ALL PROBLEMS CAN BE COMPLETED ON THIS WORKSHEET

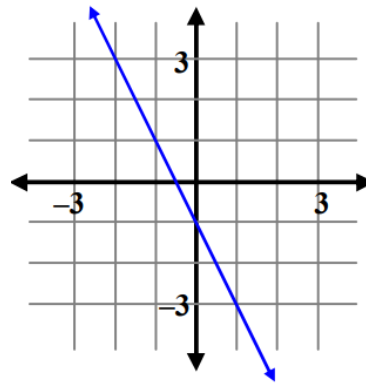
**WS 7A.2 - More Slope**

#1-4, Find the slope of each line.

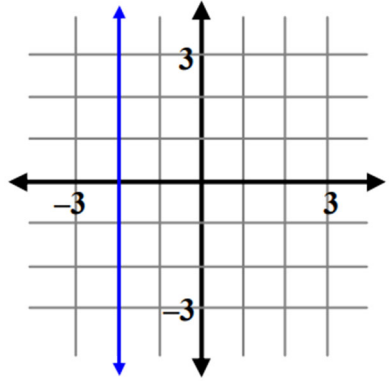
1.



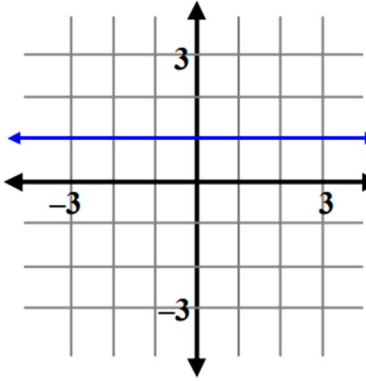
2.



3.



4.



#5-10, Find the slope of the line that contains each pair of points.

5.  $(4, -3)$  and  $(6, -13)$

6.  $(-2, 2)$  and  $(-7, -1)$

7.  $(-6, -3)$  and  $(-1, 1)$

8.  $(-5, -2)$  and  $(-5, 1)$

9.  $(7, -2)$  and  $(7, 5)$

10.  $(2, 5)$  and  $(8, -4)$